

Şekil Sayı Eşleştirme

×

= 2

○

= 7

⬠

= 3

☆

= 5

◇

= 6

▽

= 0

△

= 4

□

= 1

→

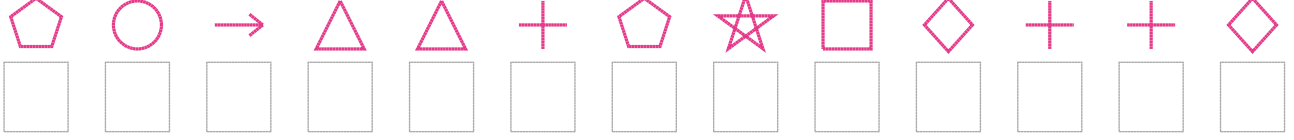
= 9

+

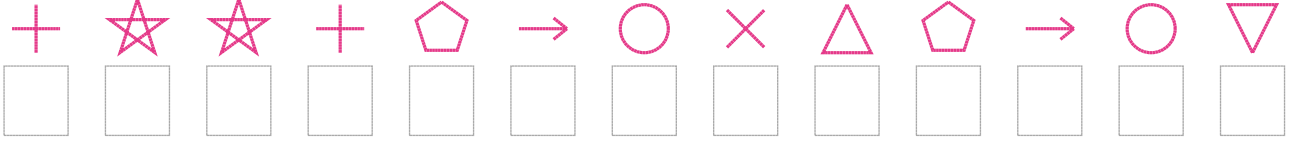
= 8

Aşağıdaki uzun şifreleri hatasız çözerek altlarına yazın:

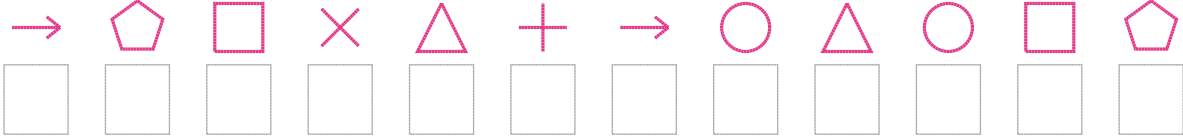
1. Şifre



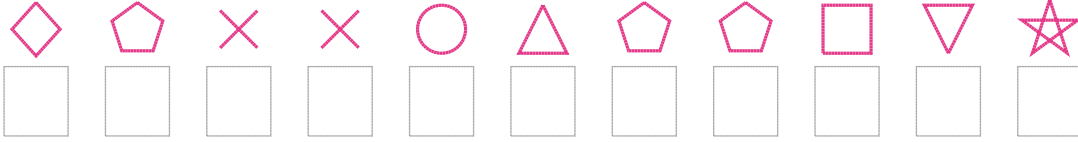
2. Şifre



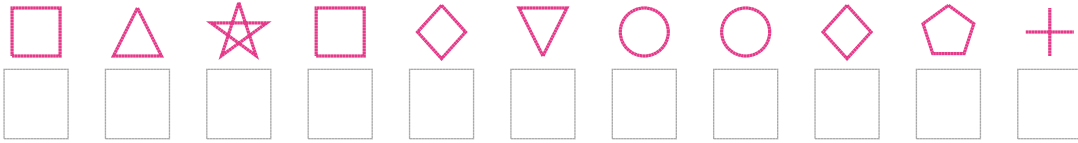
3. Şifre



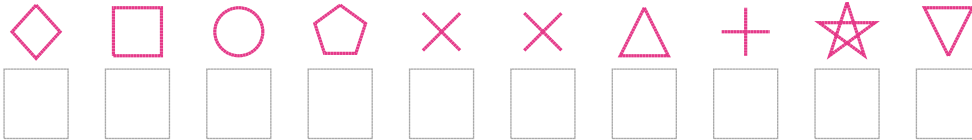
4. Şifre



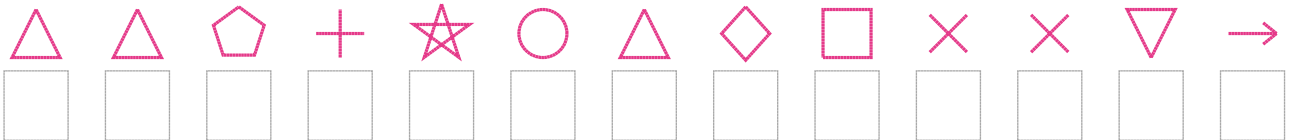
5. Şifre



6. Şifre



7. Şifre



□ BONUS: 3. ve 5. şifrenin ikinci rakamının toplamı kaçtır?

Cevap Anahtarı

1. Şifre: 3794483516886

2. Şifre: 8558397243970

3. Şifre: 931248974713

4. Şifre: 63227433105

5. Şifre: 14516077638

6. Şifre: 6173224850

7. Şifre: 4438574612209

□ Bonus Soru Cevabı: 7